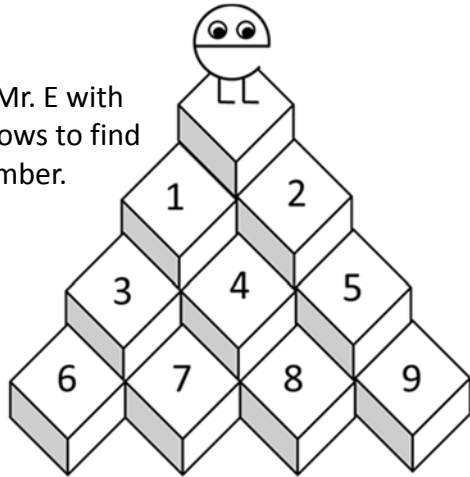


Solve the puzzles to find the 3 numbers for the keypad.

Write the 6 possible keypad combinations.

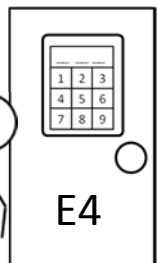
Guide Mr. E with the arrows to find the number.



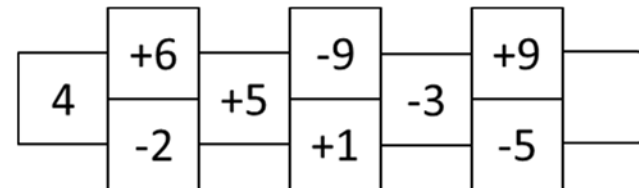
Which number is used less times than its value?

9	5	8	7	6
8	7	4	5	7
5	9	8	1	9
8	3	7	9	8
7	6	4	3	3
6	5	9	8	6
9	8	7	4	9
6	2	9	6	8
3	9	5	7	2

Keypad Combinations



1. _____
2. _____
3. _____
4. _____
5. _____
6. _____



Add and subtract all the numbers to solve this hopscotch puzzle.