

Name: _____ Date: _____

 **Change Maker** 

Directions: Count and label the coins in different ways to reach the total value.

$$22\text{¢} = \textcircled{D} \textcircled{D} \textcircled{P} \textcircled{P}$$

10¢ 20¢ 21¢ 22¢

$$22\text{¢} = \textcircled{D} \textcircled{N} \textcircled{N} \textcircled{P} \textcircled{P}$$







10¢ 15¢ 20¢ 21¢ 22¢








$$22\text{¢} = \underline{22 \text{ pennies}}$$

How many pennies?

34¢ = _____



How many pennies?






34¢ =      

34¢ =       

50¢ = _____

How many pennies?

50¢ =  

50¢ =     

50¢ = 