

Name: _____ Date: _____

 Change Maker

Directions: Count and label the coins in different ways to reach the total value.

$$22\text{¢} = \textcircled{D} \textcircled{D} \textcircled{P} \textcircled{P}$$

10¢ 20¢ 21¢ 22¢


$$22\text{¢} = \textcircled{D} \textcircled{N} \textcircled{N} \textcircled{P} \textcircled{P}$$


10¢ 15¢ 20¢ 21¢ 22¢


$$22\text{¢} = \underline{22 \text{ pennies}}$$

How many pennies?

60¢ = _____
How many pennies?

60¢ = 

60¢ = 

60¢ = 

60¢ = _____
How many nickels?