


Name: _____

Date: _____

1 $86 + 24 =$

5 Choose more likely, less likely, impossible, certain



1. Triangle: _____

2. Circle: _____

3. Square: _____

2 $42 - 16 =$

6



3 Susie has 4 cupcakes. Her mother made her subtract 3 cupcakes. How many does she have?



$4 \times 3 =$ _____

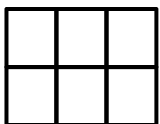
$4 \times 7 =$ _____

$4 \times 8 =$ _____

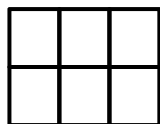
$$\begin{array}{r} 25 \\ \times 4 \\ \hline \end{array}$$

4

Make $\frac{4}{5}$



Make $\frac{1}{5}$



8

