


Name: _____


Date: _____

1

$$\begin{array}{r} 6 \\ + 8 \\ \hline \end{array}$$


5 53, 52, ____, ____, 49

2

$$\begin{array}{r} 15 \\ - 8 \\ \hline \end{array}$$






6 Steve bought 2 marbles. Chris gave him 2 more. How many Marbles does Steve have in all?

3

$$\begin{array}{r} 4 \\ 2 \\ + 3 \\ \hline \end{array}$$

7

Which letter shows an even number of shapes?

(A)  (B)  (C)  (D) 

4

$$\begin{array}{r} 65 \\ + 69 \\ \hline \end{array}$$

8 4 tens and 0 ones =

A Sheet: