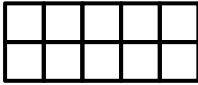


Name: _____

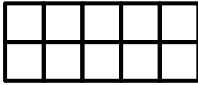
Date: _____

①



$$\begin{array}{r} 5 \\ + 3 \\ \hline \end{array}$$



⑤ 3, 6, 9, ____, ____


②


$$\begin{array}{r} 13 \\ - 4 \\ \hline \end{array}$$


⑥ What has the same size and shape?

(A) 


(B) 


(C) 


③


$$\begin{array}{r} 7 \\ 7 \\ + 7 \\ \hline \end{array}$$

⑦ Which letter shows an odd number of shapes?

(A) 

(B) 

(C) 

(D) 

④

$$\begin{array}{r} 35 \\ + 57 \\ \hline \end{array}$$

⑧ 0 tens + 3 ones =

A Sheet: