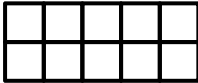


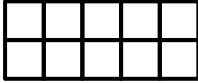
Name: _____

Date: _____

①

$$\begin{array}{r} 6 \\ + 2 \\ \hline \end{array}$$


②

$$\begin{array}{r} 16 \\ - 8 \\ \hline \end{array}$$


③



$$\begin{array}{r} 3 \\ 2 \\ + 4 \\ \hline \end{array}$$


④


$$\begin{array}{r} 23 \\ + 34 \\ \hline \end{array}$$


⑤ 2, 4, 6, ____, ____

⑥ What has the same size and shape?






(A) 


(B) 


(C) 

⑦ Which letter shows an odd number of shapes?

(A) 

(B) 

(C) 

(D) 

⑧ 2 tens + 7 ones =

A Sheet: