



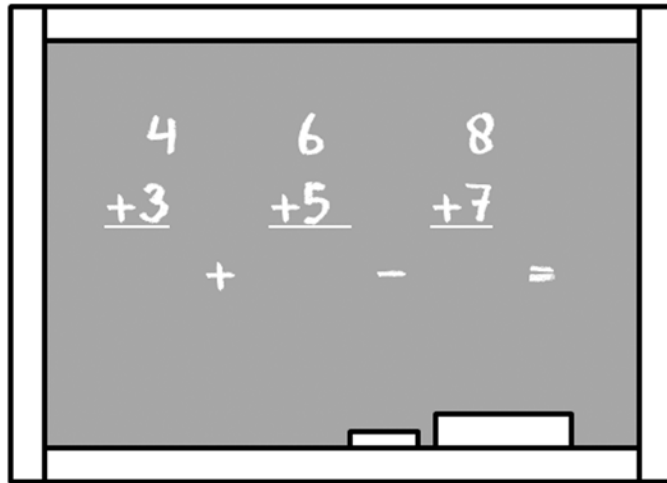
ESCAPE THE ROOM



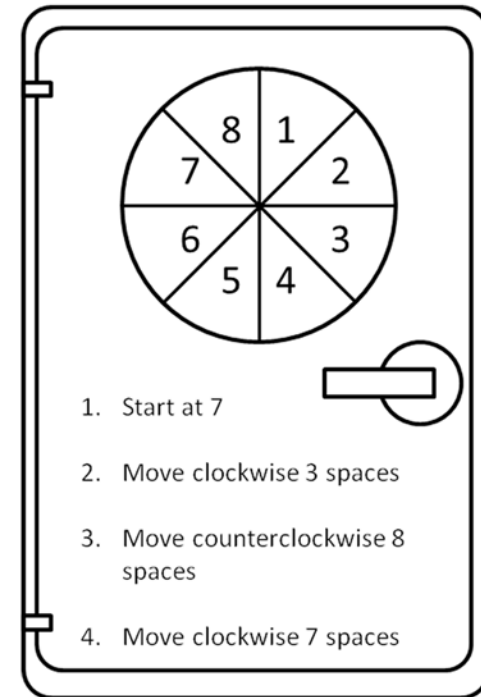
Solve the puzzles to find the 3 numbers for the keypad.

Write the 6 possible keypad combinations.

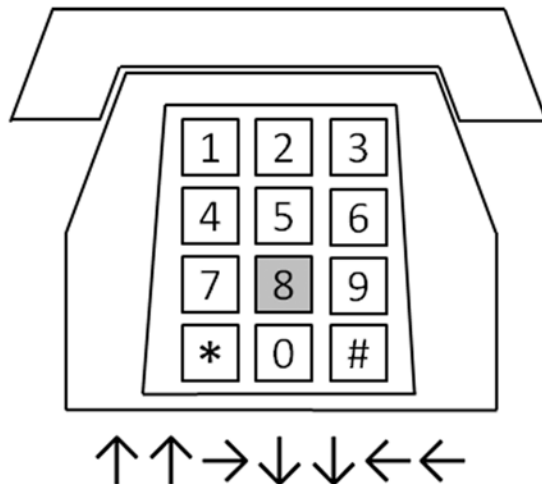
Solve the equation on the chalkboard: ____



Find the number that opens the safe: ____



Start on shaded number, follow pattern: ____



Use numbers from previous puzzles.

Keypad Combinations

1. ____ _ _
2. ____ _ _
3. ____ _ _
4. ____ _ _
5. ____ _ _
6. ____ _ _

