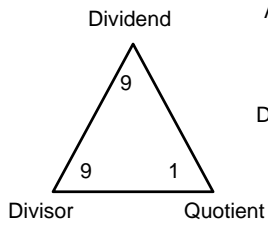


Name: _____

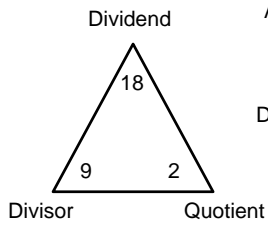
Division

Show 4 different ways to write each division fact.

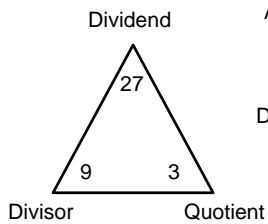
- A. $\text{Dividend} \div \text{Divisor} = \text{Quotient}$ B. $\begin{array}{r} \text{Quotient} \\ \text{Divisor} \overline{) \text{Dividend}} \end{array}$ C. $\frac{\text{Dividend}}{\text{Divisor}} = \text{Quotient}$
- D. $\text{Dividend} / \text{Divisor} = \text{Quotient}$ E. Use dividend as the answer.



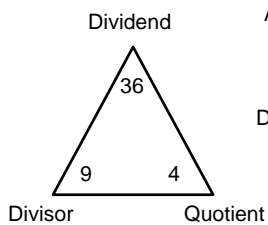
- A. $\underline{\quad} \div \underline{\quad} = \underline{\quad}$ B. $\begin{array}{r} \underline{\quad} \\ \underline{\quad} \overline{) \underline{\quad}} \end{array}$ C. $\underline{\quad} =$
- D. $\underline{\quad} / \underline{\quad} = \underline{\quad}$ E. Write multiplication fact
- X $\underline{\quad}$



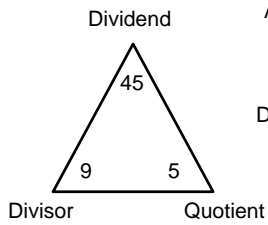
- A. $\underline{\quad} \div \underline{\quad} = \underline{\quad}$ B. $\begin{array}{r} \underline{\quad} \\ \underline{\quad} \overline{) \underline{\quad}} \end{array}$ C. $\underline{\quad} =$
- D. $\underline{\quad} / \underline{\quad} = \underline{\quad}$ E. Write multiplication fact
- X $\underline{\quad}$



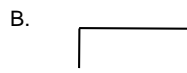
- A. $\underline{\quad} \div \underline{\quad} = \underline{\quad}$ B. $\begin{array}{r} \underline{\quad} \\ \underline{\quad} \overline{) \underline{\quad}} \end{array}$ C. $\underline{\quad} =$
- D. $\underline{\quad} / \underline{\quad} = \underline{\quad}$ E. Write multiplication fact
- X $\underline{\quad}$



- A. $\underline{\quad} \div \underline{\quad} = \underline{\quad}$ B. $\begin{array}{r} \underline{\quad} \\ \underline{\quad} \overline{) \underline{\quad}} \end{array}$ C. $\underline{\quad} =$
- D. $\underline{\quad} / \underline{\quad} = \underline{\quad}$ E. Write multiplication fact
- X $\underline{\quad}$



A. $\underline{\quad} \div \underline{\quad} = \underline{\quad}$

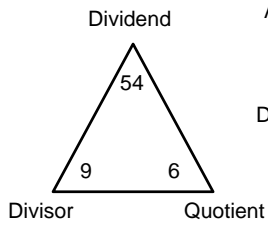


C. $\underline{\quad} =$

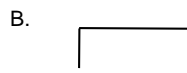
D. $\underline{\quad} / \underline{\quad} = \underline{\quad}$

E. Write multiplication fact

X $\underline{\quad}$



A. $\underline{\quad} \div \underline{\quad} = \underline{\quad}$

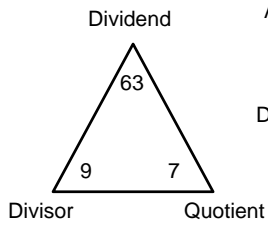


C. $\underline{\quad} =$

D. $\underline{\quad} / \underline{\quad} = \underline{\quad}$

E. Write multiplication fact

X $\underline{\quad}$



A. $\underline{\quad} \div \underline{\quad} = \underline{\quad}$

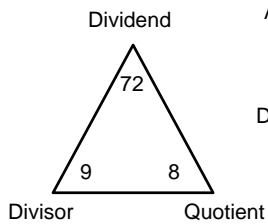


C. $\underline{\quad} =$

D. $\underline{\quad} / \underline{\quad} = \underline{\quad}$

E. Write multiplication fact

X $\underline{\quad}$



A. $\underline{\quad} \div \underline{\quad} = \underline{\quad}$

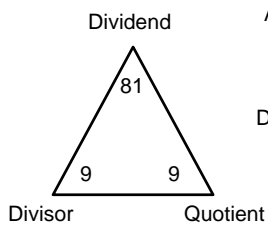


C. $\underline{\quad} =$

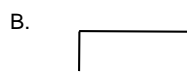
D. $\underline{\quad} / \underline{\quad} = \underline{\quad}$

E. Write multiplication fact

X $\underline{\quad}$



A. $\underline{\quad} \div \underline{\quad} = \underline{\quad}$



C. $\underline{\quad} =$

D. $\underline{\quad} / \underline{\quad} = \underline{\quad}$

E. Write multiplication fact

X $\underline{\quad}$