

Name: _____ Date: _____

Counting Money- Quarters and Nickels


Add the coins.


1.  = **110¢** _____

2.  = **70¢** _____


3.  = **95¢** _____

4.  = **55¢** _____

5.  = **60¢** _____

6.  = **15¢** _____

7.  = **50¢** _____

8.  = **80¢** _____
