


Name: \_\_\_\_\_ Date: \_\_\_\_\_

### Counting Money- Quarters and Nickels


Add the coins.

1.  = **110¢** \_\_\_\_\_  
 \_\_\_\_\_

2.  = **70¢** \_\_\_\_\_  
 \_\_\_\_\_


3.  = **95¢** \_\_\_\_\_  
 \_\_\_\_\_

4.  = **55¢** \_\_\_\_\_  
 \_\_\_\_\_

5.  = **60¢** \_\_\_\_\_  
 \_\_\_\_\_

6.  = **15¢** \_\_\_\_\_  
 \_\_\_\_\_

7.  = **50¢** \_\_\_\_\_  
 \_\_\_\_\_

8.  = **80¢** \_\_\_\_\_  
 \_\_\_\_\_