

Name: _____ Date: _____

Counting Money- Quarters and Nickels

Add the coins.




1.      = _____





2.      = _____




3.      = _____

4.       = _____

5.      = _____

6.    = _____

7.     = _____

8.    = _____

9.       = _____

10.      = _____