


Name: _____ Date: _____

Counting Money- Quarters and Nickels


Add the coins.

1.  = 55¢

2.  = 70¢

3.  = 35¢


4.  = 65¢


5.  = 35¢

6.  = 85¢

7.  = 110¢

8.  = 130¢

9.  = 75¢

10.  = 80¢