


Name: \_\_\_\_\_ Date: \_\_\_\_\_

## Counting Money- Quarters and Nickels


Add the coins.

1.  = 55¢

2.  = 130¢

3.  = 40¢


4.  = 115¢

5.  = 80¢

6.  = 75¢

7.  = 90¢

8.  = 70¢

9.  = 60¢

10.  = 85¢