


Name: _____ Date: _____

Counting Money- Quarters and Nickels


Add the coins.


1.  = 90¢

2.  = 55¢

3.  = 70¢

4.  = 130¢

5.  = 45¢

6.  = 40¢

7.  = 115¢

8.  = 135¢

9.  = 110¢

10.  = 75¢