




Name: \_\_\_\_\_ Date: \_\_\_\_\_

## Counting Money- Quarters and Dimes

Add the coins.

1.  = \_\_\_\_\_  
 \_\_\_\_\_


2.  = \_\_\_\_\_  
 \_\_\_\_\_


3.  = \_\_\_\_\_  
 \_\_\_\_\_

4.  = \_\_\_\_\_  
 \_\_\_\_\_

5.  = \_\_\_\_\_  
 \_\_\_\_\_

6.  = \_\_\_\_\_  
 \_\_\_\_\_

7.  = \_\_\_\_\_  
 \_\_\_\_\_

8.  = \_\_\_\_\_  
 \_\_\_\_\_