



Name: \_\_\_\_\_ Date: \_\_\_\_\_

## Counting Money- Quarters and Pennies


Add the coins.


1.  = **51¢** \_\_\_\_\_


2.  = **75¢** \_\_\_\_\_


3.  = **27¢** \_\_\_\_\_

4.  = **78¢** \_\_\_\_\_

5.  = **28¢** \_\_\_\_\_

6.  = **76¢** \_\_\_\_\_

7.  = **3¢** \_\_\_\_\_

8.  = **51¢** \_\_\_\_\_

9.  = **4¢** \_\_\_\_\_

10.  = **125¢** \_\_\_\_\_