


Name: _____ Date: _____

Counting Money- Dimes, Nickels, and Pennies

Add the coins.


1.  = 21¢


2.  = 46¢

3.  = 16¢

4.  = 32¢

5.  = 42¢

6.  = 11¢

7.  = 14¢

8.  = 41¢
