


Name: _____ Date: _____

Counting Money- Dimes, Nickels, and Pennies

Add the coins.

1.  = 12¢

2.  = 13¢


3.  = 16¢


4.  = 20¢

5.  = 43¢

6.  = 46¢

7.  = 52¢

8.  = 18¢

9.  = 41¢

10.  = 51¢