


Name: \_\_\_\_\_ Date: \_\_\_\_\_

### Counting Money- Dimes and Nickels


Add the coins.


1.  = \_\_\_\_\_  
 \_\_\_\_\_

2.  = \_\_\_\_\_  
 \_\_\_\_\_


3.  = \_\_\_\_\_  
 \_\_\_\_\_

4.  = \_\_\_\_\_  
 \_\_\_\_\_

5.  = \_\_\_\_\_  
 \_\_\_\_\_

6.  = \_\_\_\_\_  
 \_\_\_\_\_

7.  = \_\_\_\_\_  
 \_\_\_\_\_

8.  = \_\_\_\_\_  
 \_\_\_\_\_