


Name: _____ Date: _____

Counting Money- Dimes and Nickels


Add the coins.

1.  = 50¢

2.  = 45¢

3.  = 35¢


4.  = 35¢

5.  = 30¢

6.  = 50¢

7.  = 30¢

8.  = 55¢

9.  = 45¢

10.  = 50¢