



Name: _____ Date: _____

Counting Money- Dimes and Nickels

Add the coins.

1.  = 25¢

2.  = 45¢


3.  = 25¢

4.  = 20¢

5.  = 60¢

6.  = 35¢

7.  = 65¢

8.  = 20¢

9.  = 45¢

10.  = 30¢