

Name: _____ Date: _____

Counting Money- Dimes and Nickels


Add the coins.

1.  = 60¢


2.  = 30¢

3.  = 25¢


4.  = 45¢

5.  = 30¢

6.  = 15¢

7.  = 45¢

8.  = 50¢

9.  = 20¢

10.  = 55¢