


Name: _____ Date: _____


Counting Money- Dimes and Pennies

Add the coins.


1.  = 22¢

2.  = 44¢


3.  = 17¢

4.  = 33¢

5.  = 53¢

6.  = 41¢

7.  = 40¢

8.  = 13¢
