




Name: _____ Date: _____

Counting Money- Dimes and Pennies

Add the coins.

1.  = 4¢


2.  = 15¢

3.  = 51¢

4.  = 61¢

5.  = 43¢

6.  = 53¢

7.  = 32¢

8.  = 34¢