


Name: _____ Date: _____

Counting Money- Dimes and Pennies

Add the coins.

1.  = 35¢


2.  = 41¢


3.  = 33¢

4.  = 3¢

5.  = 21¢

6.  = 22¢

7.  = 42¢

8.  = 43¢
