


Name: _____ Date: _____

Counting Money- Dimes and Pennies


Add the coins.

1.  = 62¢


2.  = 33¢

3.  = 25¢

4.  = 44¢

5.  = 42¢

6.  = 26¢

7.  = 24¢

8.  = 53¢