


Name: _____ Date: _____

Counting Money- Dimes and Pennies

Add the coins.

1.  = 12¢


2.  = 34¢


3.  = 43¢


4.  = 15¢

5.  = 30¢

6.  = 52¢

7.  = 33¢

8.  = 32¢

9.  = 23¢

10.  = 44¢