


Name: _____ Date: _____


Counting Money- Nickels and Pennies

Add the coins.


1.  = _____

2.  = _____

3.  = _____

4.  = _____

5.  = _____

6.  = _____

7.  = _____

8.  = _____
