



Name: _____ Date: _____

Counting Money- Nickels and Pennies

Add the coins.

1.  = 4¢

2.  = 21¢


3.  = 16¢

4.  = 26¢

5.  = 12¢

6.  = 32¢

7.  = 8¢

8.  = 3¢