

Name: _____ Date: _____

Counting Money- Nickels and Pennies

Add the coins.


1.  = 23¢


2.  = 15¢


3.  = 18¢

4.  = 24¢


5.  = 19¢

6.  = 9¢

7.  = 13¢

8.  = 20¢

9.  = 16¢

10.  = 16¢