



Name: _____ Date: _____


Counting Money- Nickels and Pennies

Add the coins.

1.  = 19¢


2.  = 7¢

3.  = 11¢

4.  = 3¢

5.  = 27¢

6.  = 15¢

7.  = 13¢

8.  = 24¢

9.  = 22¢

10.  = 11¢