



Name: \_\_\_\_\_ Date: \_\_\_\_\_


## Counting Money- Quarters, Nickels, Dimes, and Pennies


Add the coins.

1.  = \_\_\_\_\_  
 \_\_\_\_\_

2.  = \_\_\_\_\_  
 \_\_\_\_\_

3.  = \_\_\_\_\_  
 \_\_\_\_\_

4.  = \_\_\_\_\_  
 \_\_\_\_\_

5.  = \_\_\_\_\_  
 \_\_\_\_\_

6.  = \_\_\_\_\_  
 \_\_\_\_\_

7.  = \_\_\_\_\_  
 \_\_\_\_\_

8.  = \_\_\_\_\_  
 \_\_\_\_\_