


Name: _____ Date: _____

Counting Money- Quarters, Nickels, and Pennies


Add the coins.

1.  = 76¢

2.  = 18¢

3.  = 42¢

4.  = 64¢


5.  = 25¢

6.  = 55¢

7.  = 52¢

8.  = 72¢

9.  = 41¢

10.  = 50¢