


Name: _____ Date: _____


Counting Money- Quarters, Nickels, Dimes, and Pennies


Add the coins.

1.  = _____

2.  = _____


3.  = _____

4.  = _____

5.  = _____

6.  = _____

7.  = _____

8.  = _____

9.  = _____

10.  = _____