


Name: _____ Date: _____

Counting Money- Quarters, Nickels, Dimes, and Pennies


Add the coins.

1.  = 26¢

2.  = 96¢


3.  = 60¢

4.  = 21¢

5.  = 46¢

6.  = 80¢

7.  = 53¢

8.  = 55¢

9.  = 110¢

10.  = 11¢