

Name: _____ Date: _____

Counting Money- Quarters, Nickels, Dimes, and Pennies


Add the coins.


1.  = 72¢

2.  = 101¢

3.  = 48¢


4.  = 36¢


5.  = 50¢

6.  = 31¢

7.  = 82¢

8.  = 40¢

9.  = 30¢

10.  = 71¢