


Name: \_\_\_\_\_ Date: \_\_\_\_\_

## Counting Money- Quarters, Nickels, and Dimes

Add the coins.

1.  = 90¢


\_\_\_\_\_

2.  = 60¢

\_\_\_\_\_

3.  = 75¢

\_\_\_\_\_

4.  = 55¢

\_\_\_\_\_

5.  = 45¢


\_\_\_\_\_

6.  = 100¢

\_\_\_\_\_

7.  = 85¢

\_\_\_\_\_

8.  = 60¢

\_\_\_\_\_