


Name: \_\_\_\_\_ Date: \_\_\_\_\_


## Counting Money- Quarters, Nickels, and Dimes


Add the coins.


1.  = \_\_\_\_\_  
 \_\_\_\_\_


2.  = \_\_\_\_\_  
 \_\_\_\_\_

3.  = \_\_\_\_\_  
 \_\_\_\_\_

4.  = \_\_\_\_\_  
 \_\_\_\_\_

5.  = \_\_\_\_\_  
 \_\_\_\_\_

6.  = \_\_\_\_\_  
 \_\_\_\_\_

7.  = \_\_\_\_\_  
 \_\_\_\_\_

8.  = \_\_\_\_\_  
 \_\_\_\_\_