

Name: \_\_\_\_\_ Date: \_\_\_\_\_

## Counting Money- Quarters, Nickels, and Dimes


Add the coins.


1.  = 40¢

2.  = 100¢


3.  = 95¢

4.  = 85¢

5.  = 45¢

6.  = 35¢

7.  = 75¢

8.  = 70¢

9.  = 115¢

10.  = 30¢