


Name: _____ Date: _____


Counting Money- Quarters, Nickels, and Dimes

Add the coins.


1.  = 85¢

2.  = 70¢

3.  = 85¢

4.  = 85¢

5.  = 65¢

6.  = 40¢

7.  = 40¢

8.  = 75¢

9.  = 95¢

10.  = 75¢