



Name: _____ Date: _____


Counting Money- Quarters, Nickels, and Dimes

Add the coins.


1.  = 50¢

2.  = 95¢

3.  = 80¢

4.  = 25¢

5.  = 25¢

6.  = 30¢

7.  = 30¢

8.  = 105¢

9.  = 125¢

10.  = 115¢