

Name: _____ Date: _____

Counting Money- Quarters, Nickels, and Dimes


Add the coins.


1.  = **80¢** _____

2.  = **80¢** _____

3.  = **85¢** _____

4.  = **75¢** _____


5.  = **60¢** _____

6.  = **85¢** _____

7.  = **100¢** _____

8.  = **145¢** _____

9.  = **120¢** _____

10.  = **50¢** _____