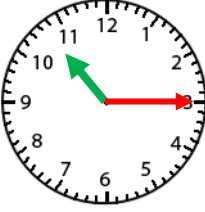
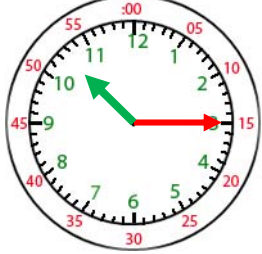

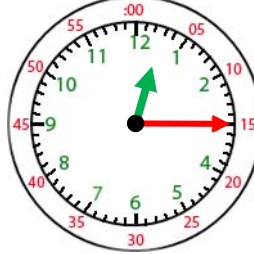
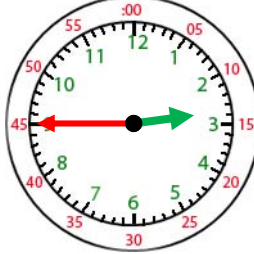
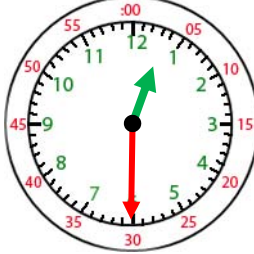

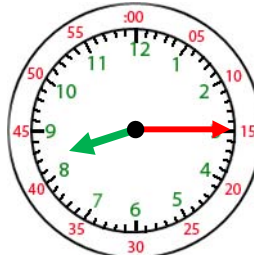
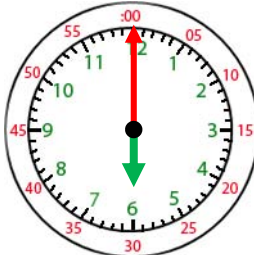
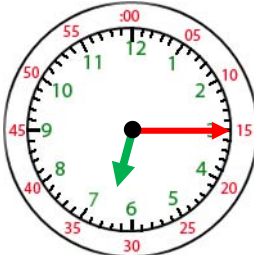
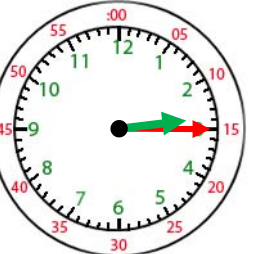
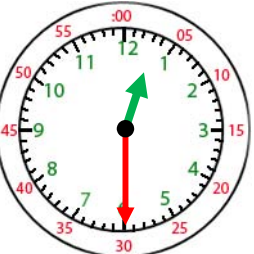




Name: _____

Telling Time- Quarter Hour

	<p>When the minute hand is pointed at the 3, write 15 for minutes.</p> <p>When the minute hand is pointed at the 6, write 30 for minutes.</p> <p>When the minute hand is pointed at the 9, write 45 for minutes.</p>	
<p>10:15</p>		<p>10:15</p>

 1. <u> </u> 8:00	 2. <u> </u> 12:15	 3. <u> </u> 2:45	 4. <u> </u> 12:30
 5. <u> </u> 11:45	 6. <u> </u> 8:15	 7. <u> </u> 6:00	 8. <u> </u> 6:15
 9. <u> </u> 2:15	 10. <u> </u> 12:30	 11. <u> </u> 3:45	 12. <u> </u> 5:15