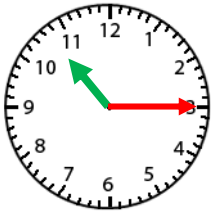


Name: \_\_\_\_\_

### Telling Time- Quarter Hour



10:15

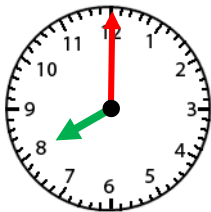
When the minute hand is pointed at the 3,  
write 15 for minutes.

When the minute hand is pointed at the 6,  
write 30 for minutes.

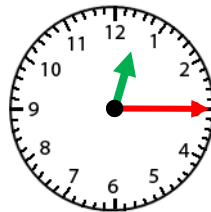
When the minute hand is pointed at the 9,  
write 45 for minutes.



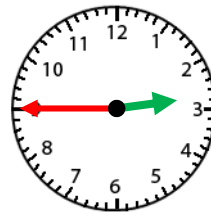
10:15



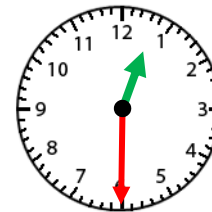
1. \_\_\_\_\_



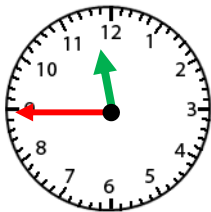
2. \_\_\_\_\_



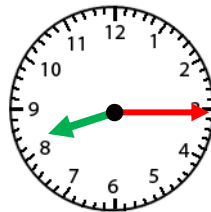
3. \_\_\_\_\_



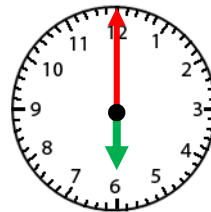
4. \_\_\_\_\_



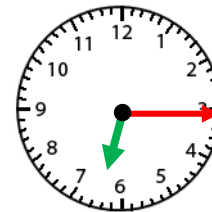
5. \_\_\_\_\_



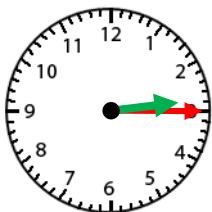
6. \_\_\_\_\_



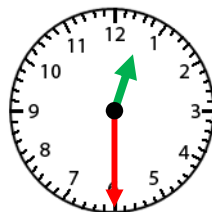
7. \_\_\_\_\_



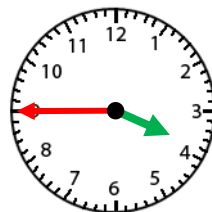
8. \_\_\_\_\_



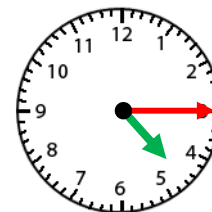
9. \_\_\_\_\_



10. \_\_\_\_\_



11. \_\_\_\_\_



12. \_\_\_\_\_