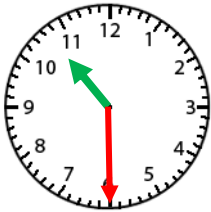


Name: _____

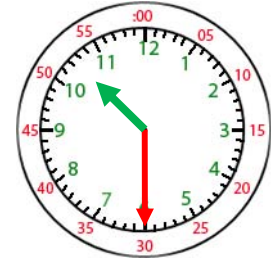
Telling Time- Half Hour

The hour hand will be in the middle of two numbers on the half hour.

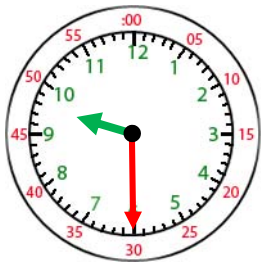
When the minute hand is pointed at the 6, write 30 for minutes.



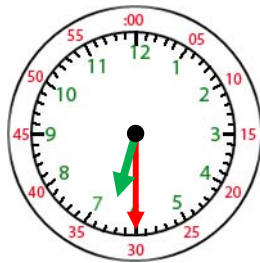
3:00



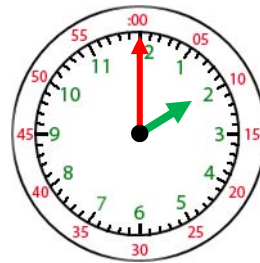
3:00



1.
9:30



2.
6:30



3.
2:00



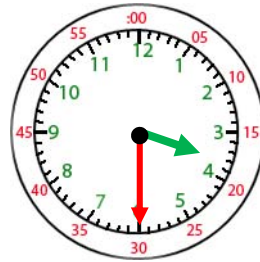
4.
4:30



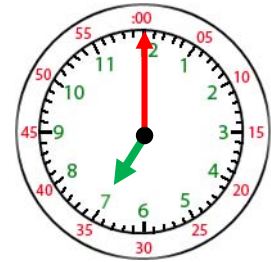
5.
1:00



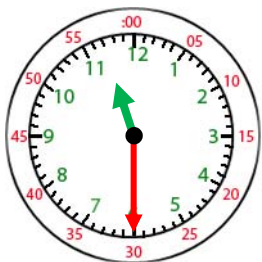
6.
10:30



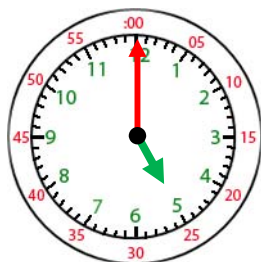
7.
3:30



8.
7:00



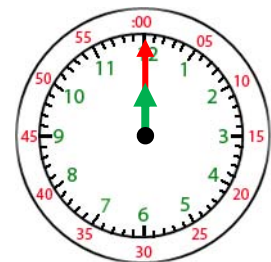
9.
11:30



10.
5:00



11.
8:30



12.
12:00