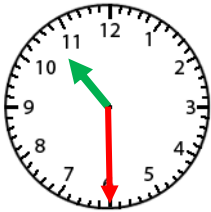


Name: _____

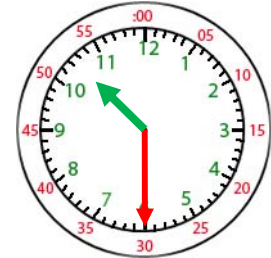
Telling Time- Half Hour

The hour hand will be in the middle of two numbers on the half hour.

When the minute hand is pointed at the 6, write 30 for minutes.



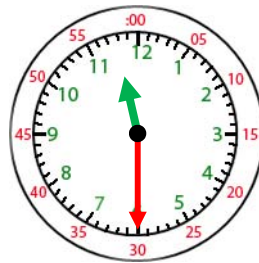
10:30



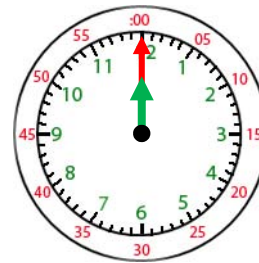
10:30



1. 7:00



2. 11:30



3. 12:00



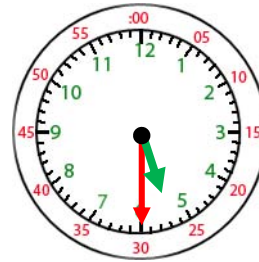
4. 4:30



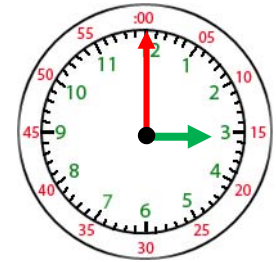
5. 9:30



6. 7:30



7. 5:30



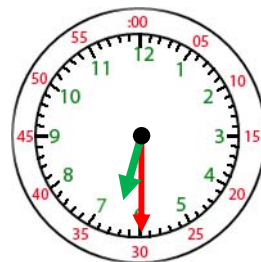
8. 3:00



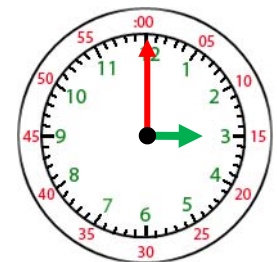
9. 4:00



10. 1:00



11. 6:30



12. 3:00