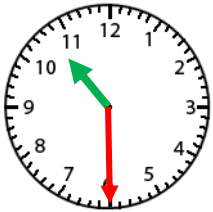


Name: _____

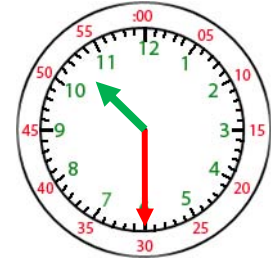
Telling Time- Half Hour



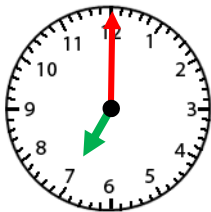
10:30

The hour hand will be in the middle of two numbers on the half hour.

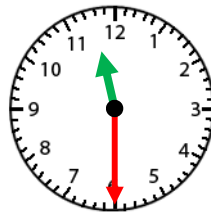
When the minute hand is pointed at the 6, write 30 for minutes.



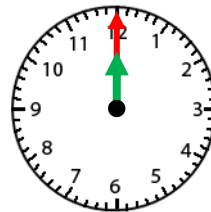
10:30



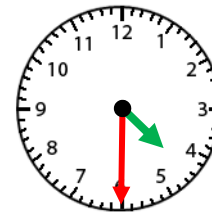
1. _____



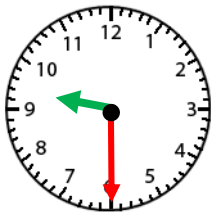
2. _____



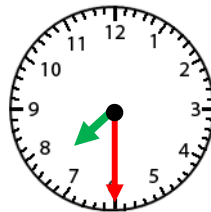
3. _____



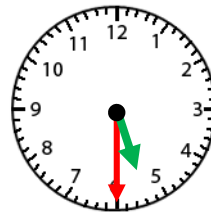
4. _____



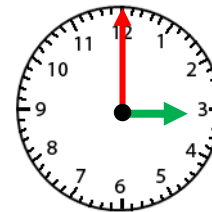
5. _____



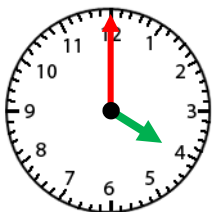
6. _____



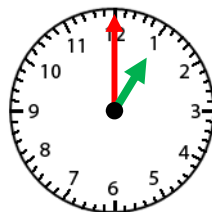
7. _____



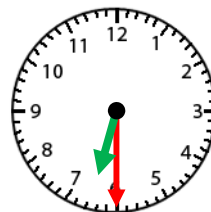
8. _____



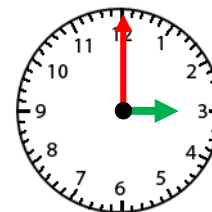
9. _____



10. _____



11. _____



12. _____