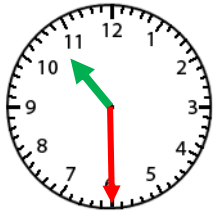


Name: _____

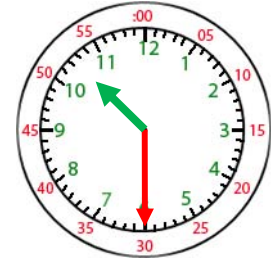
Telling Time- Half Hour



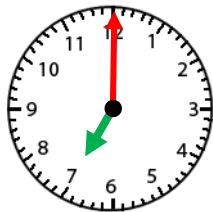
10:30

The hour hand will be in the middle of two numbers on the half hour.

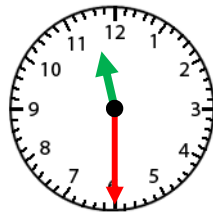
When the minute hand is pointed at the 6, write 30 for minutes.



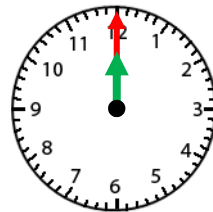
10:30



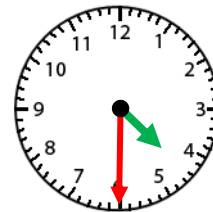
1. 7:00



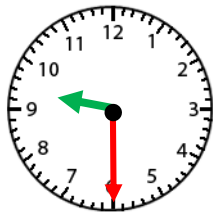
2. 11:30



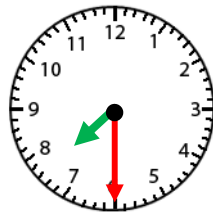
3. 12:00



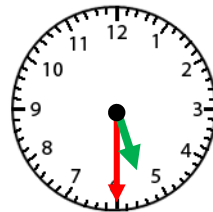
4. 4:30



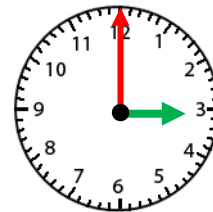
5. 9:30



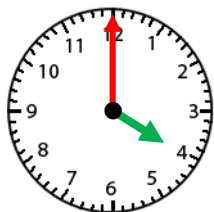
6. 7:30



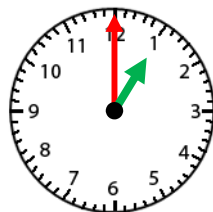
7. 5:30



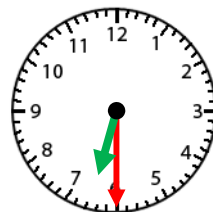
8. 3:00



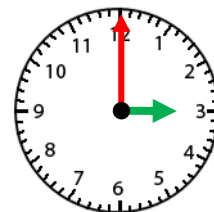
9. 4:00



10. 1:00



11. 6:30



12. 3:00