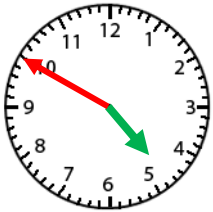


Name: _____

Telling Time- Nearest 5 Minute

Count by 5 for the minute hand.

The hour hand will be close to the bigger number. Use the smaller number.



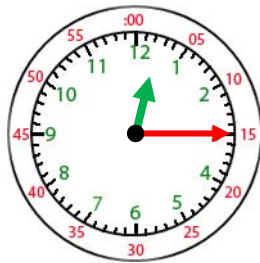
4:50



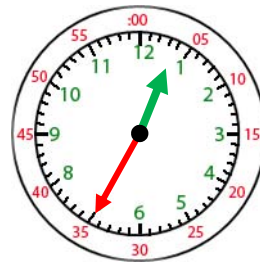
4:50



1. 2:10



2. 12:15



3. 12:35



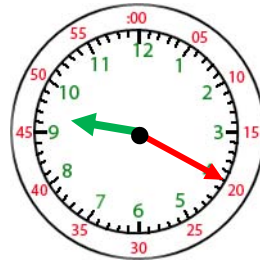
4. 8:55



5. 1:10



6. 5:25



7. 9:20



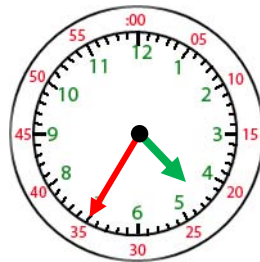
8. 7:05



9. 11:50



10. 8:35



11. 4:35



12. 5:40